

Name: \_\_\_\_\_

## MONDAY AIMS WEB PLUS PRACTICE

1.

588



500



600

2.

7,055



7,000



6,000

3.

Which number is the largest?

3,550

3,055

3,005

3,555

4.

Which number is in the hundreds place?

7,894

5.

Which is the same as 1,215?

1,000 + 200 + 10 + 2

1,000 + 200 + 10 + 5

100 + 200 + 10 + 5

6.

Which is halfway between 1,000 and 2,000?

Name: \_\_\_\_\_

## TUESDAY AIMS WEB PLUS PRACTICE

1.

300



0



600

2.

250



0



500

3.

$$240 + 20 =$$

4.

Which fraction is the largest?

$\frac{1}{2}$

$\frac{2}{4}$

$\frac{3}{4}$

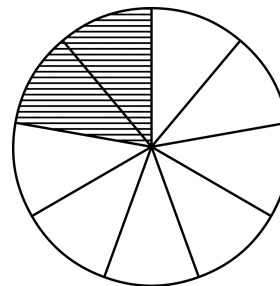
$\frac{5}{6}$

5.

$$415 - 160 =$$

6.

Write the fraction



Name: \_\_\_\_\_

## WEDNESDAY AIMS WEB PLUS PRACTICE

1.

# 5,555



5,000



6,000

2.

# 7,555



7,000



8,000

3. When rounded to the nearest hundred, which two numbers round to the same value?

660

652

605

602

4. If a second array, with the same number of cookies was added, how many cookies would there be in all?



5.

$$5 \times (3 \times 3) = 5 \times ?$$

6.

$$4 \times 10 = 10 \times ?$$

Name: \_\_\_\_\_

## THURSDAY AIMS WEB PLUS PRACTICE

1.

58



0



100


2.

Sally planted 4 pots of flowers. If each pot has 2 flowers, how many flowers are there in all?

3.

Bobby had 40 plants and 10 pots. How many plants would equally go into each pot?

4. Here is an array of apples. If a second array, with the same number of apples were added, how many apples would there be in all?



5.

$$10 \times (5 \times 2) = 10 \times ?$$

6.

Which number is the same as :  
4 hundreds + 3 tens + 2 ones

423

432

4,332

Name: \_\_\_\_\_

## FRIDAY AIMS WEB PLUS PRACTICE

1. How many tens are in 1,232

2.

1,895



0



2,000

3. When rounded to the nearest hundred, which two numbers round to the same value?

603

630

602

802

4. Claire had 10 squads, each with 2 players. How many players are playing Fortnite in all?

5.

$$3 \times (3 \times 5) = 3 \times ?$$

6.

Which number is the same as :  
2 thousand + 8 hundreds + 5 tens + 3 ones

432

423

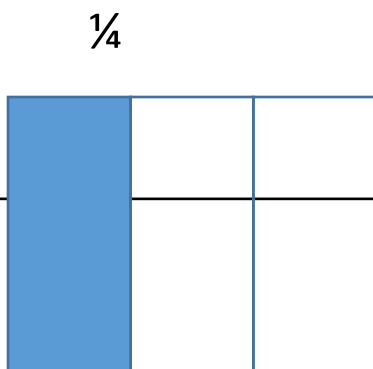
1,342

1,432

Name: \_\_\_\_\_

Which fraction is the largest?

$\frac{1}{5}$   
 $\frac{1}{3}$



Write the  
fraction

Which fraction is the largest?

$\frac{6}{9}$   
 $\frac{6}{6}$

When rounded to the nearest ten, which two  
numbers round to 90?

86  
89  
96  
97

$$825 + 450 =$$

1275

$$415 - 160 =$$

415

Name: \_\_\_\_\_

Which pair make the equation true?


$$8 \times ? = 4 \times ?$$

8,4

8,2

4, 8

2, 8



Write the fraction



Here is an array of stars. If a second array, with the same number of stars, what will be the new total number of stars?

Which number makes this equation true?

$$5 \times (3 \times 2) = 5 \times ?$$

8

6

3

5

When rounded to the nearest hundred, which two numbers round to the same value?

741

759

834

862

How many sets of ten are 180?

415